

EPIC Learners

Exploration

Evaluation


Perseverance

Independence

Challenge

Creative Thinking

Co-operation and
Collaboration



EPIC Awards

Exploration

Evaluation

Perseverance

Independence

Challenge

Creative Thinking

Co-operation and
Collaboration

Year 3

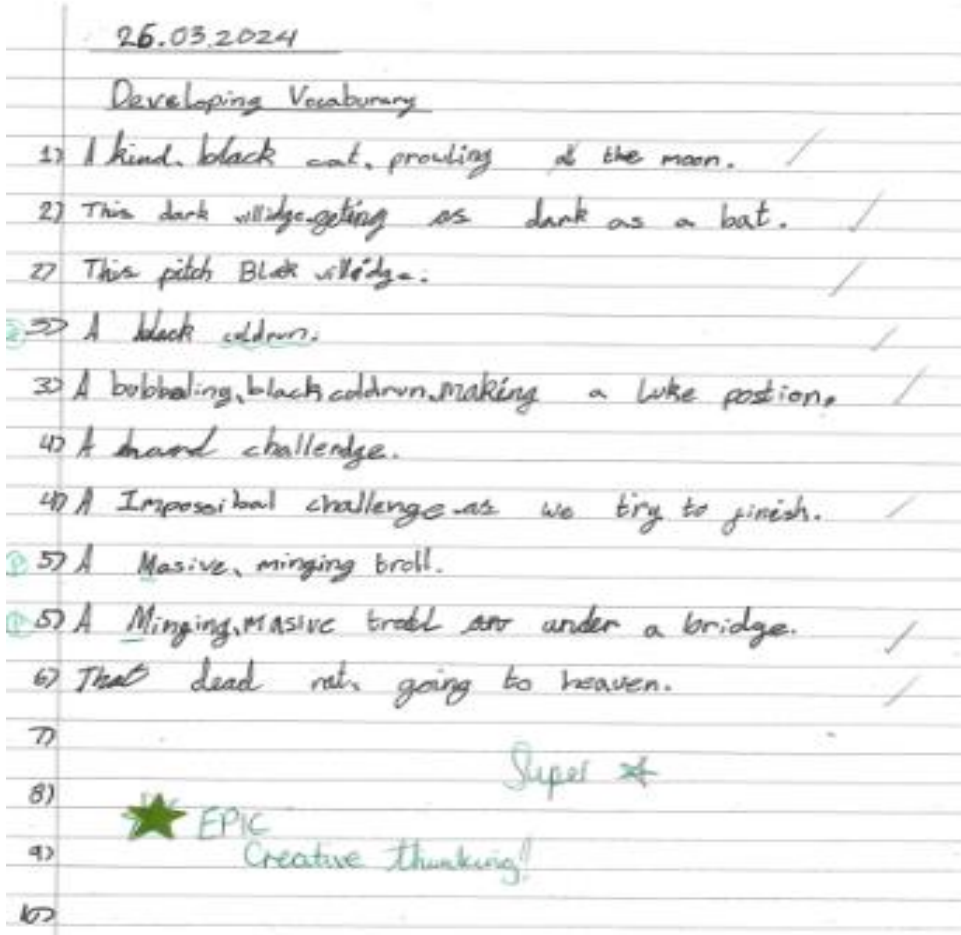


Name: Freya

Subject: English

This work is EPIC because:

- 1) Great persevering
- 2) Fantastic handwriting
- 3) Incredible developing vocabulary



Year 4



denominator ✓

The whole is 24 $\frac{1}{6}$ of 24 = 4 ✓
 The whole is 40 $\frac{1}{8}$ of 40 = 5 ✓
 The whole is 150 $\frac{1}{3}$ of 150 = 50 ✓
 The whole is 450 $\frac{1}{5}$ of 450 = 90 ✓

1) 28 ✓
 2) 4 ✓

I realise they're both in the 4 times table

2) Knight as $10 \div 5 = 2 \times 4 = 8$
 $10 - 8 = 2$ so 2 km ✓

$15 - 3 - 2 = 10$

10 sweets

$7 - 2 = 5$

16 min of the stick
 12 bags for butter

out of 7 ✓

2000 is the biggest possible

1 km 2 km
 2 km 3 km
 2 km 2 km

60 32 46

1 2 3 4

Find the sum of 3000

Prove
 Match the question to the bar model.
 Use the bar models to answer the questions.

$\frac{1}{2}$ of 8 = 4

$\frac{1}{4}$ of 32 = 8

$\frac{1}{6}$ of 36 = 6

$\frac{1}{5}$ of 50 = 10

$\frac{1}{8}$ of 40 = 5

$\frac{1}{3}$ of 15 = 5

$\frac{1}{4}$ of 8 = 2

$\frac{1}{5}$ of 20 = 4

$\frac{1}{6}$ of 18 = 3

Every time I see they're multiples of

$\frac{1}{2}$ is you divide the by the number it gives it all
 you 3 like $10 \div 5 = 2$ the denominator = 2

Name: Eloise

Subject: Maths

This work is EPIC because:

- 1) Incredible presentation
- 2) Fabulous understanding
- 3) Accurate method

Year 5



25.03.24

Inventories RULES

- 1: the hall
- 2: the shop
- 3: the floor

Richard

Questions

what was the house like? what clothes did he own? what possessions did he own?

Answer

Like a mansion - probably covered in jewels - lots of really precious expensive stuff like a lot of money

Items (shop)

a board, shelf
a bench
two old & sheets

Questions

who created the source? who was the audience for the source? what was the purpose of the source? how accurate was the source?

Answers

William Baylyes
vicar of Rye, Kent
Richard's family and his man. So everyone could have very!

Tudor Inventories

Using Tudor inventories

Name of person:	What can you look at?	Deductions
Occupation	Was there a shop? Animals? Tools/equipment?	<ul style="list-style-type: none"> in the shop A artist box with fabric up animal pillow cases cabinet BOOKS.
House	How many rooms did the house have? What furniture was mentioned? Is there a description of the furniture?	<ul style="list-style-type: none"> 5 rooms two brass pots, three brass pans and one Kettle one pair of pillow cases and three trials. A Flock bed yes description:
Clothes	Are there any? What was the description of them?	<ul style="list-style-type: none"> two hobbles two pillows one blanket one woollen fabric and 10 bedspreads his yes woven Black (mercy)
Possession	Are any possessions mentioned? What were the plates made of?	<ul style="list-style-type: none"> two brass pots brass is a good strong type of metal two painted hangings could be used but chests might have precious things in it

I think that she was rich/poor/comfortably well off because it seemed she was a mansion/artist and did not have a lot of money so she did not have much stuff.

Name: Florence

Subject: History

This work is EPIC because:

- 1) Incredible note-taking
- 2) Unique understanding
- 3) Beautiful presentation

Year 6




Name: Frankie

Subject: Geography

This work is EPIC because:

- 1) Neat handwriting
- 2) Amazing colouring
- 3) Fantastic labelling





Well done to all our EPIC Learners

Exploration

Evaluation

Perseverance

Independence

Challenge

Creative Thinking

Co-operation and
Collaboration